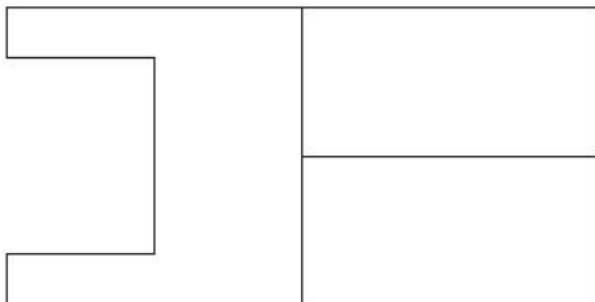
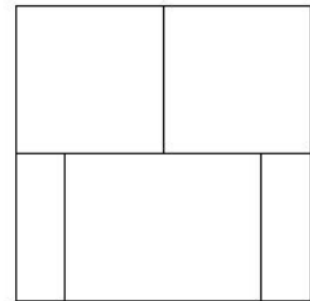
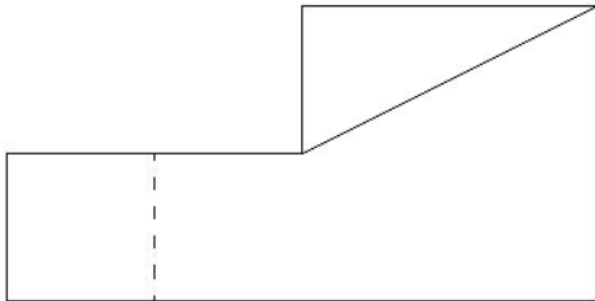


Vaje drugi teden:

Nariši v izometrični projekciji



Dodaj svoji dve risbi po izbiri!

Poskusi rešiti kviz za sedmi razred

<https://www.proprofs.com/quiz-school/story.php?title=tehnika-in-tehnologija-7-razred>